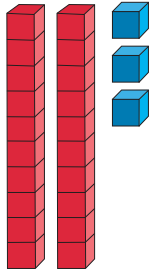


Place Value Activity Sheet


Name: _____ Date: _____

Write how many tens and ones there are.



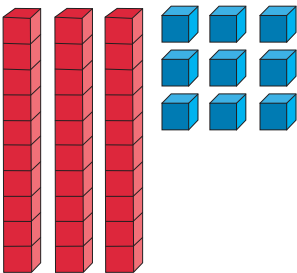
_____ tens _____ ones

_____ + _____ = _____



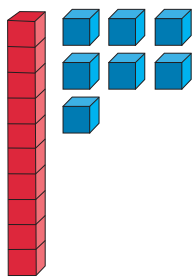
_____ tens _____ one

_____ + _____ = _____



_____ tens _____ ones

_____ + _____ = _____



_____ ten _____ ones

_____ + _____ = _____

Draw this number in base 10 and write the number sentence below.

4 tens 5 ones

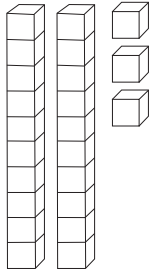
_____ + _____ = _____



Place Value Activity Sheet Answers


Name: _____ Date: _____

Write how many tens and ones there are.



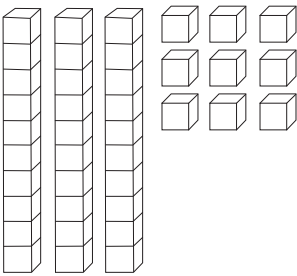
2 tens 3 ones

$$\underline{20} + \underline{3} = \underline{23}$$



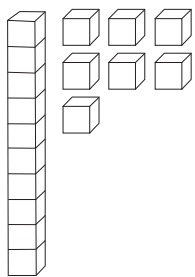
6 tens 1 one

$$\underline{60} + \underline{1} = \underline{61}$$



3 tens 9 ones

$$\underline{30} + \underline{9} = \underline{39}$$



1 ten 7 ones

$$\underline{10} + \underline{7} = \underline{17}$$

Draw this number in base 10 and write the number sentence below.

4 tens 5 ones

$$\underline{40} + \underline{5} = \underline{45}$$

